

6 times table

Name: _____

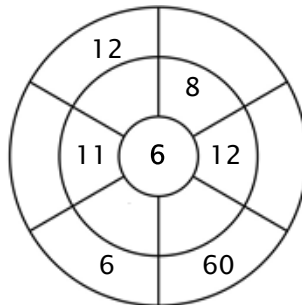
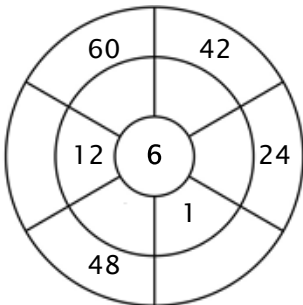
Exercise 1:

Color in all of the boxes that are the solutions of this time table.

24	22	18	60	30
60	36	48	48	72
1	5	37	6	49
54	65	55	23	6
44	9	24	12	66

Exercise 2:

Complete the circle by multiplying the number in the center by the middle ring to get the outer numbers.



Exercise 3:

Fill in the correct product.

a) $6 \times 6 = \underline{\quad}$

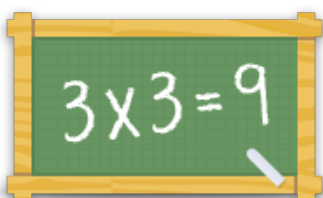
b) $3 \times 6 = \underline{\quad}$

c) $11 \times 6 = \underline{\quad}$

d) $8 \times 6 = \underline{\quad}$

e) $9 \times 6 = \underline{\quad}$

f) $1 \times 6 = \underline{\quad}$



For more worksheets, games and exercises:
www.timestables.co.uk