




Add Equal Groups

1. Jaz wants to show three equal groups of four. Circle the number pieces she needs.


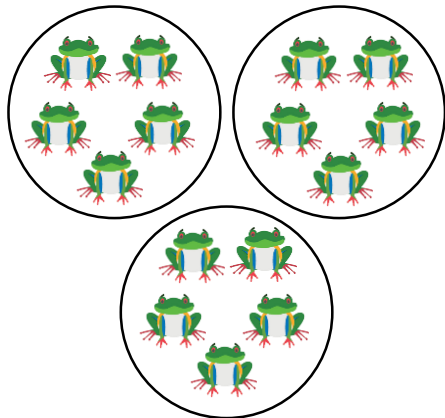


Write a number sentence to show Jaz's total.



VF
HW/Ext

2. Use the number cards to complete the sentence below.




There are equal groups of frogs.

Write a number sentence to show how many frogs there are altogether.




VF
HW/Ext

3. Syma and Harry are putting cookies on plates.



The plates show $2 + 2 + 2$ so there are 6 in total.



Syma

The plates show $3 + 3 + 3$ so there are 9 in total.



Harry






Who do you agree with? Explain why.







RPS
HW/Ext

Add Equal Groups

4. Taj wants to show four equal groups of five. Circle the number pieces he needs.

A.  B.  C.  D.  E. 



F.  G.  H.  I. 

Write a number sentence to show Taj's total.



VF
HW/Ext

5. Use the number cards to complete the sentence below.




There are equal groups of birds.

Write a number sentence to show how many birds there are altogether.




VF
HW/Ext

6. Reena and Bob are putting cakes on plates.



There are 7 equal groups with 3 in each group.



The plates show $7 + 7 + 7$ so there are three groups of 7.




Who do you agree with? Explain why.



RPS
HW/Ext

Add Equal Groups

7. Phil wants to collect four purses with a value of 10p each. Circle the purses he needs.

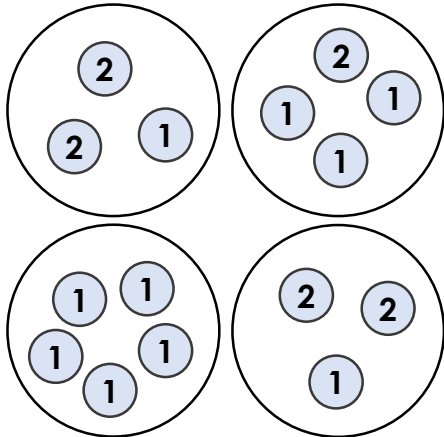


Write a number sentence to show Phil's total.



VF
HW/Ext

8. Use the number cards to complete the sentences below.



fives

four

five

There are equal groups of .


There are four .

Write a number sentence to show the total.



VF
HW/Ext

9. Kelly and Dev are selling plates of sandwiches. They have made a price list.



- Wrap – £1
- Half sandwich – £2
- Full sandwich – £3

£4 + £4 + £4 + £4 =
£16 so together all
of the food costs
£16.



There are four plates
each costing 3
pounds so they cost
£12 altogether.



Who do you agree with? Explain why.



RPS
HW/Ext