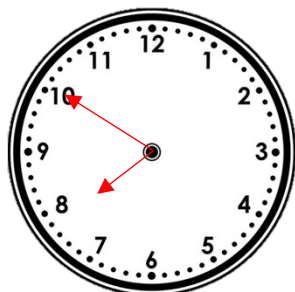


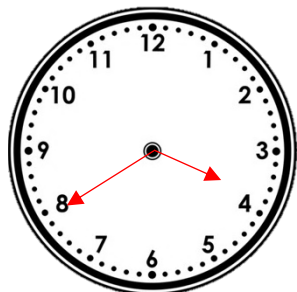
WAL to draw the hands on a clock face (analogue) to five minute intervals to the hour.

Do it:

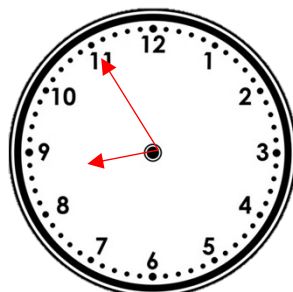
Draw the missing hands on the clocks so that they show the correct time written underneath it.



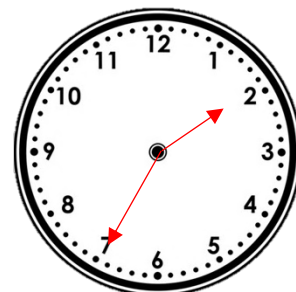
10 to 8



20 to 4

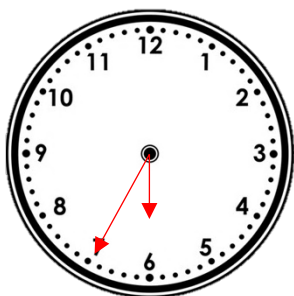


5 to 9



25 to 2

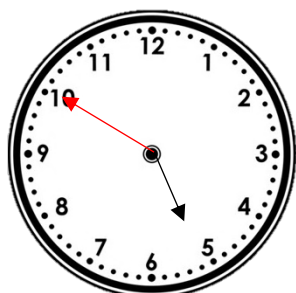
Secure it:



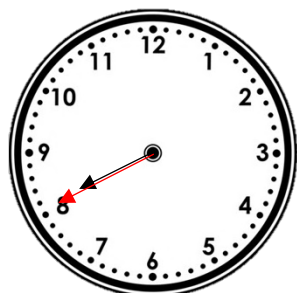
It takes Colin 5 minutes to complete each worksheet his teacher has given him. He has 4 worksheets to complete. If he starts working at 25 to 6, what time will he finish? Draw the hands on the clock.

Deepen it:

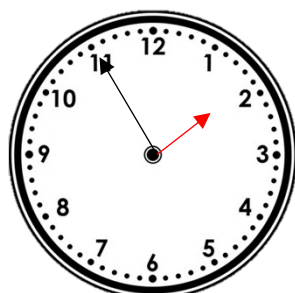
The minute hands have fallen off of my clocks! Please can you help me? I need you to draw the missing hands!



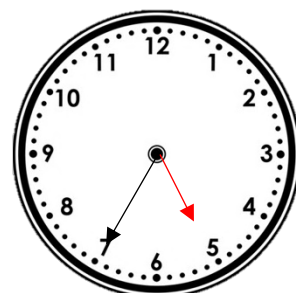
10 to 5



20 to 8



5 to 2



25 to 5