

Year 5

Mathematics

Arithmetic: Test 8

Name	
Date	




32

total marks

1


$423 - 100 =$



1 mark

2


$298 + 500 =$



1 mark

3

$36 \times 4 =$




1 mark




Total for this page

4

$$\frac{7}{10} + \frac{1}{10} =$$




1 mark

5

$$\frac{11}{12} - \frac{5}{12} =$$



1 mark

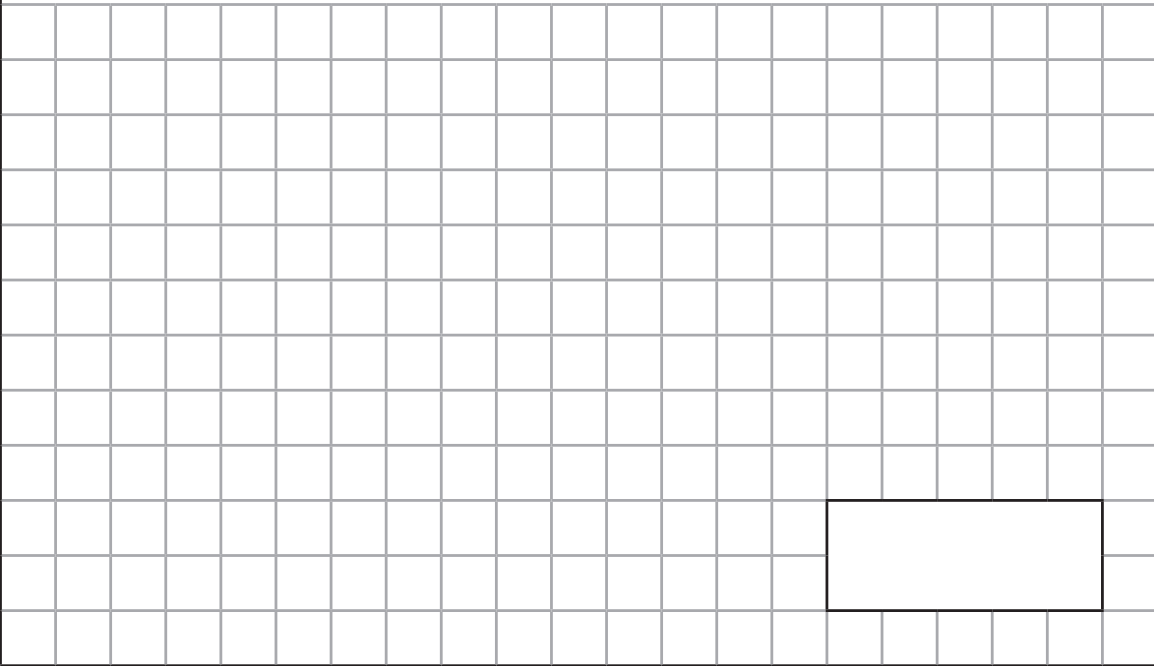
6

$$3892 + 6117 =$$



1 mark
Total for
this page

25

$$287 \times 16 =$$



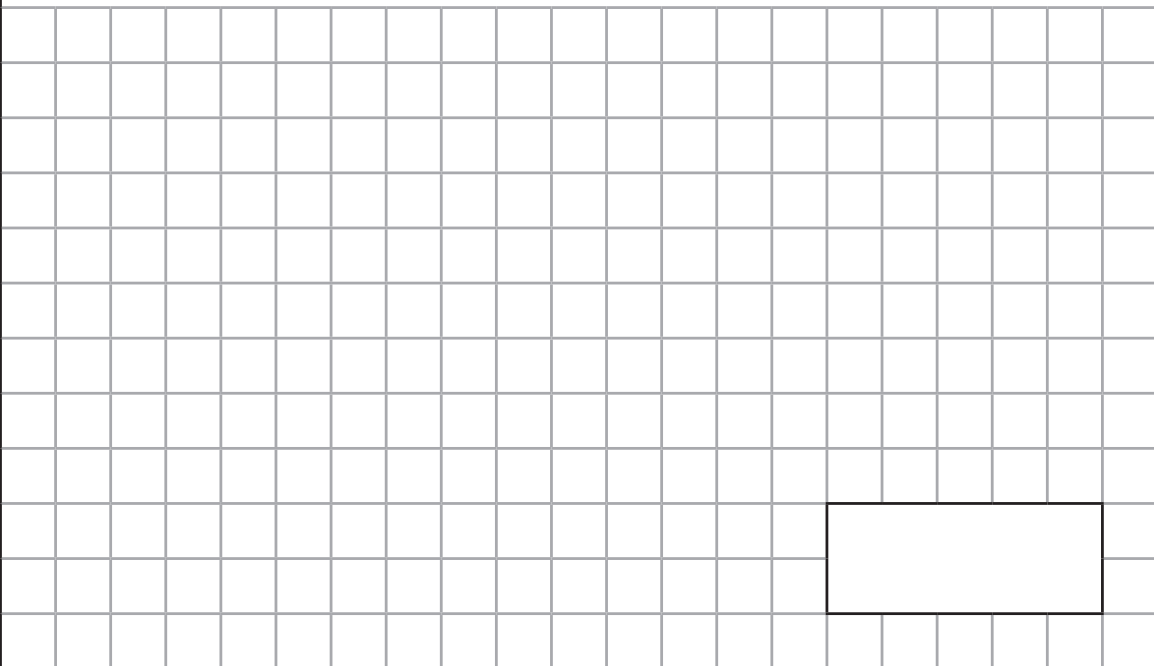
A large grid for working out the multiplication 287×16 . The grid is 20 columns wide and 18 rows high. A small rectangular box is drawn on the grid, spanning 5 columns and 2 rows, located in the bottom right corner of the grid area.



2 marks

26

$$6634 \times 37 =$$



A large grid for working out the multiplication 6634×37 . The grid is 20 columns wide and 18 rows high. A small rectangular box is drawn on the grid, spanning 5 columns and 2 rows, located in the bottom right corner of the grid area.



2 marks

Total for
this page

Guidance: Children will have 30 minutes for this test.

question	answer	marks
1	323	1
2	798	1
3	144	1
4	$\frac{8}{10}$ or $\frac{4}{5}$	1
5	$\frac{6}{12}$ or $\frac{1}{2}$	1
6	10 009	1
7	2307	1
8	84	1
9	56	1
10	2312	1
11	4.74	1
12	0.86	1
13	18	1
14	64 496	1
15	80 400	1
16	386 545	1
17	64	1
18	1000	1
19	120	1
20	2.03	1
21	$1\frac{1}{2}$	1

question	answer	marks
22	$\frac{1}{8}$	1
23	$4\frac{2}{3}$	1
24	1.95	1
25	4592	2
26	245 458	2
27	163	2
28	412	2
		Total 32